


## Plotting rational numbers on a number line:

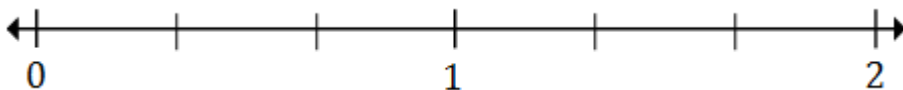
Name ..... Date ..... Score .....

Plot the following rational numbers on the number line.

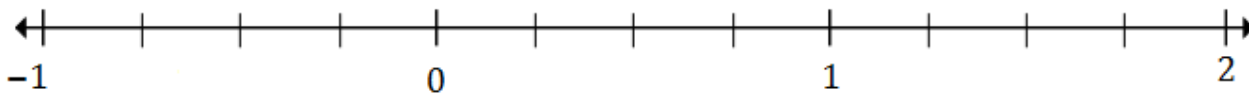
1. Plot  $-\frac{1}{3}$  and  $1\frac{2}{3}$  on the number line below



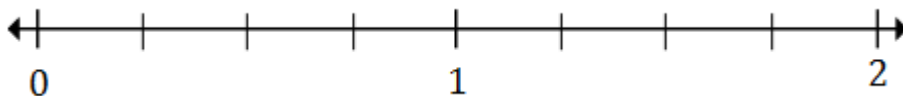
2. Plot  $\frac{2}{3}$  and  $1\frac{1}{3}$  on the number line below



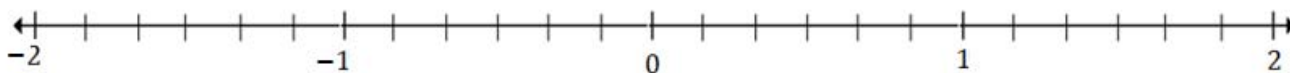
3. Plot  $-\frac{1}{2}$  and  $1\frac{3}{4}$  on the number line below



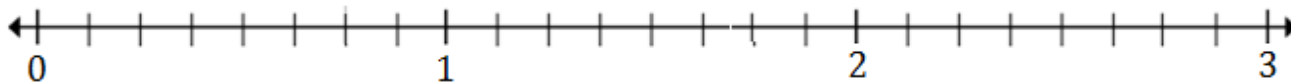
4. Plot  $\frac{1}{4}$  and  $1\frac{2}{4}$  on the number line below



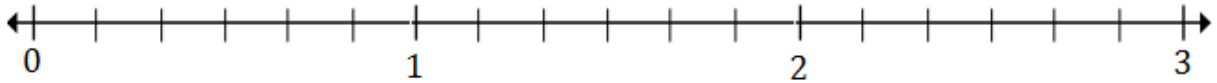
5. Plot  $-1\frac{1}{2}$  and  $1\frac{4}{6}$  on the number line below



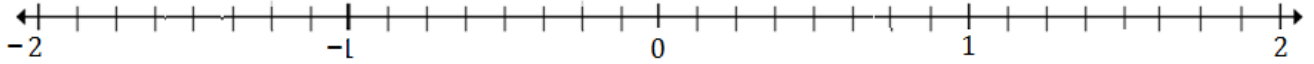
6. Plot  $1\frac{1}{3}$  and  $2\frac{5}{6}$  on the number line below



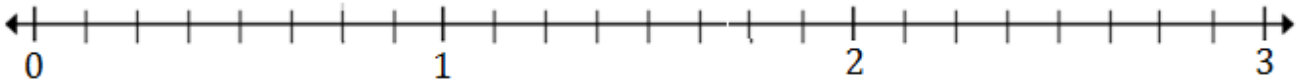
7. Plot  $1\frac{1}{6}$  and  $2\frac{3}{6}$  on the number line below



8. Plot  $-1\frac{1}{2}$  and  $1\frac{5}{8}$  on the number line below



9. Plot  $\frac{3}{4}$  and  $2\frac{7}{8}$  on the number line below



10. Plot  $\frac{5}{8}$  and  $2\frac{3}{8}$  on the number line below

